

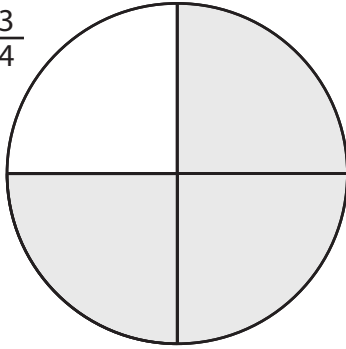
Identifying Fractions

Name _____

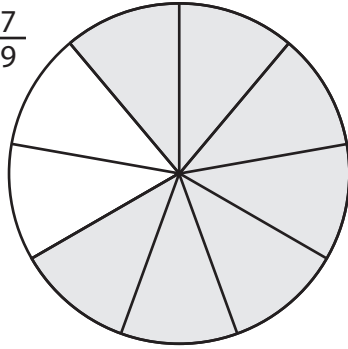
Date _____

Directions: Write the correct fraction for the shaded part.

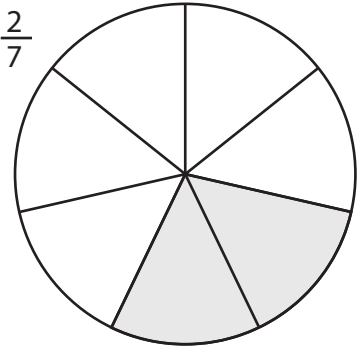
① $\frac{3}{4}$



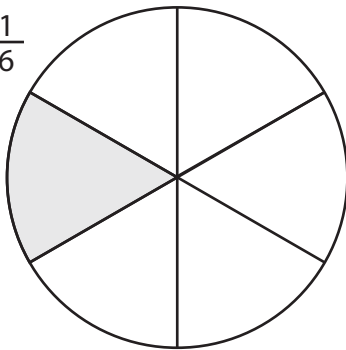
② $\frac{7}{9}$



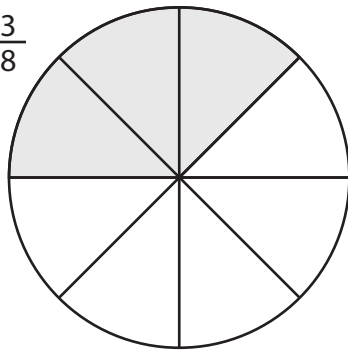
③ $\frac{2}{7}$



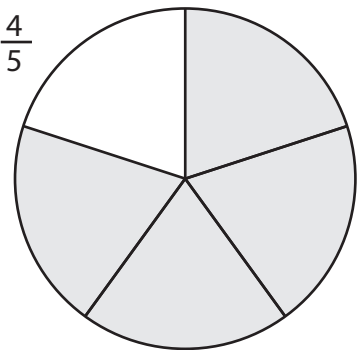
④ $\frac{1}{6}$



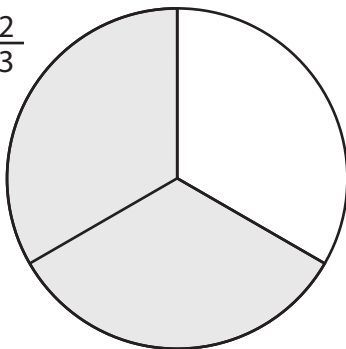
⑤ $\frac{3}{8}$



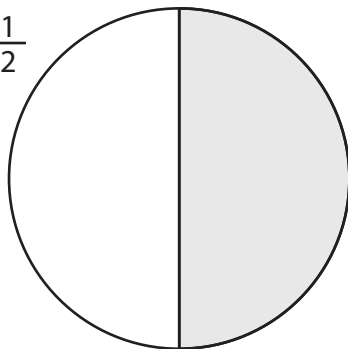
⑥ $\frac{4}{5}$



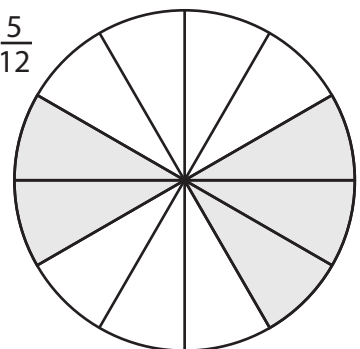
⑦ $\frac{2}{3}$



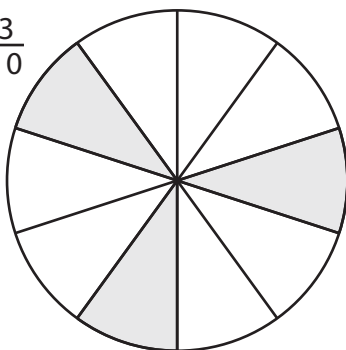
⑧ $\frac{1}{2}$



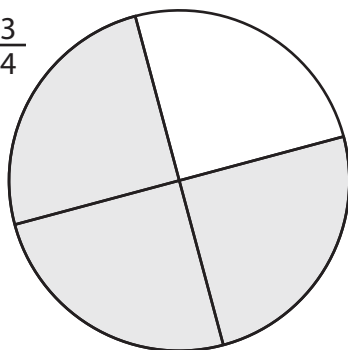
⑨ $\frac{5}{12}$



⑩ $\frac{3}{10}$



⑪ $\frac{3}{4}$



⑫ $\frac{5}{8}$

